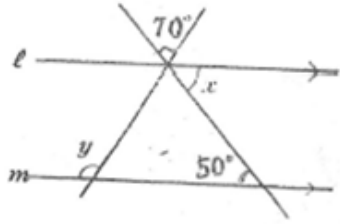


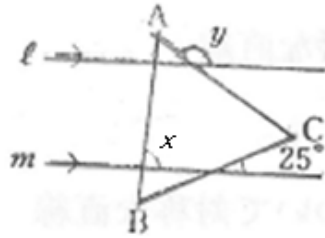
問題: 次の角度を求めなさい。ただし、 $l \parallel m$ とする。

①



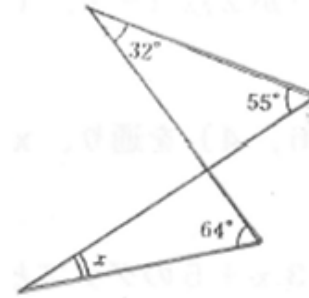
$\angle x = 50^\circ \quad \angle y = 120^\circ$

② $\triangle ABC$ は正三角形



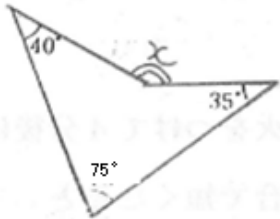
$\angle x = 85^\circ \quad \angle y = 145^\circ$

③



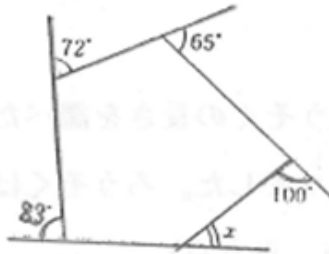
$\angle x = 23^\circ$

④



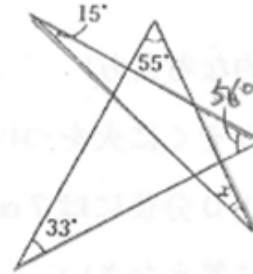
$\angle x = 150^\circ$

⑤



$\angle x = 40^\circ$

⑥



$\angle x = 21^\circ$