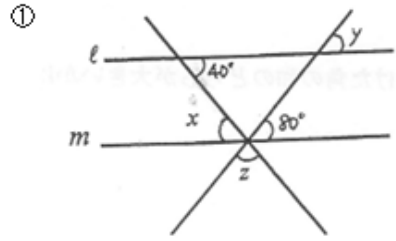
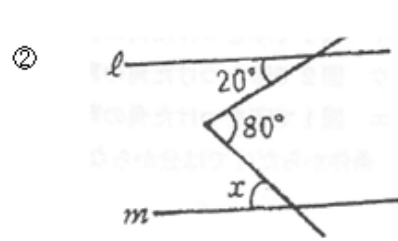


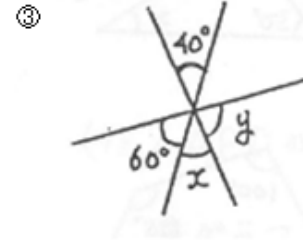
問題: 次の角度を求めなさい。ただし、 $l \parallel m$  とする。



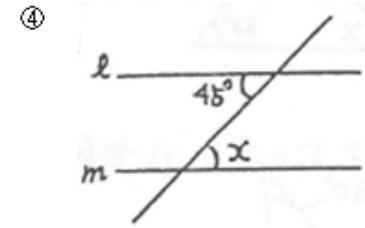
$\angle x = 40^\circ$   $\angle y = 80^\circ$   $\angle z = 60^\circ$



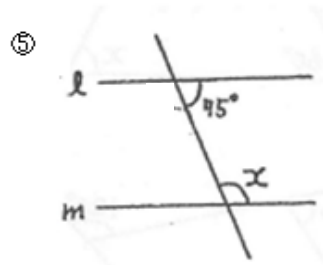
$\angle x = 60^\circ$



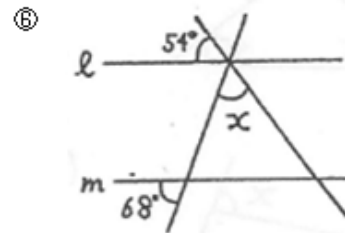
$\angle x = 40^\circ$   $\angle y = 80^\circ$



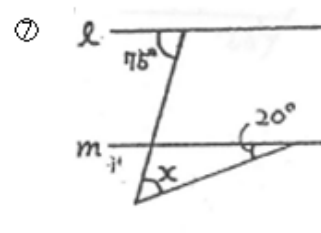
$\angle x = 45^\circ$



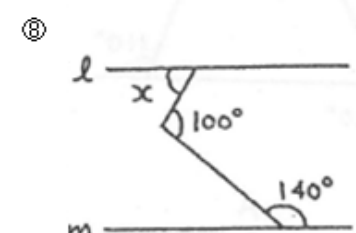
$\angle x = 105^\circ$



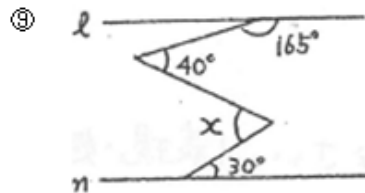
$\angle x = 58^\circ$



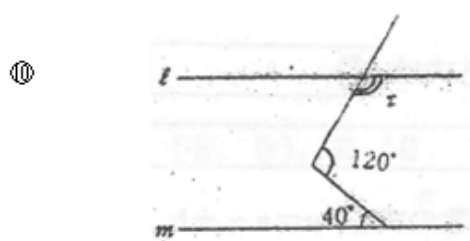
$\angle x = 55^\circ$



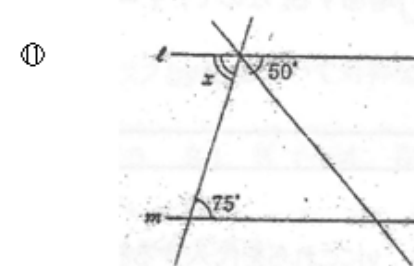
$\angle x = 60^\circ$



$\angle x = 55^\circ$



$\angle x = 100^\circ$



$\angle x = 75^\circ$