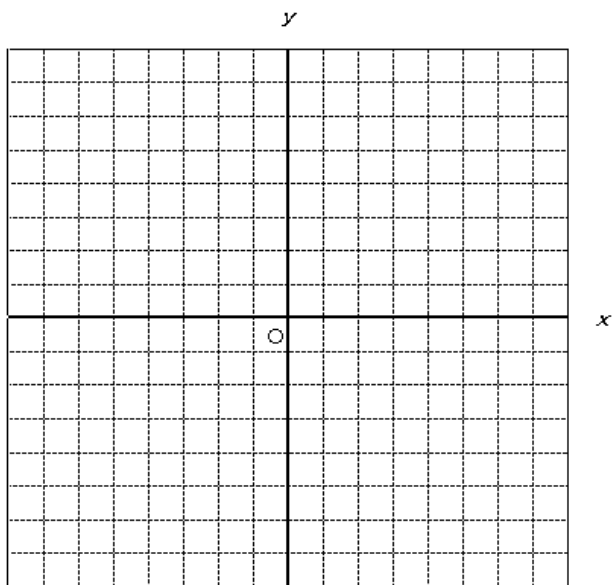


問題： 次のグラフをかきなさい。

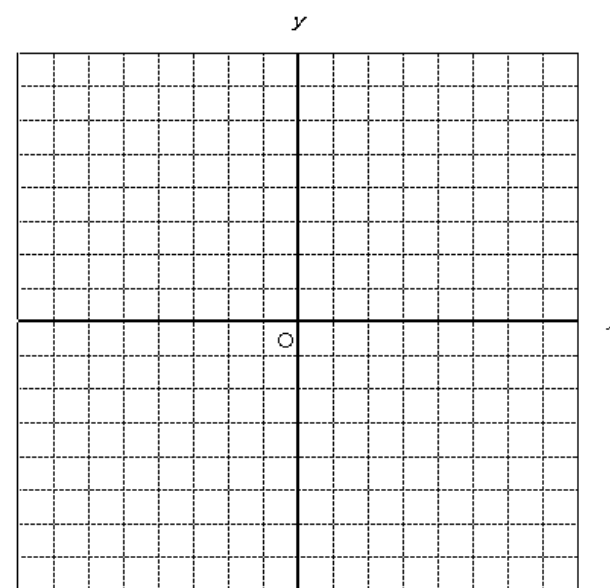
ア

- (1) $y = 2x$
- (2) $y = 3x$
- (3) $y = x$



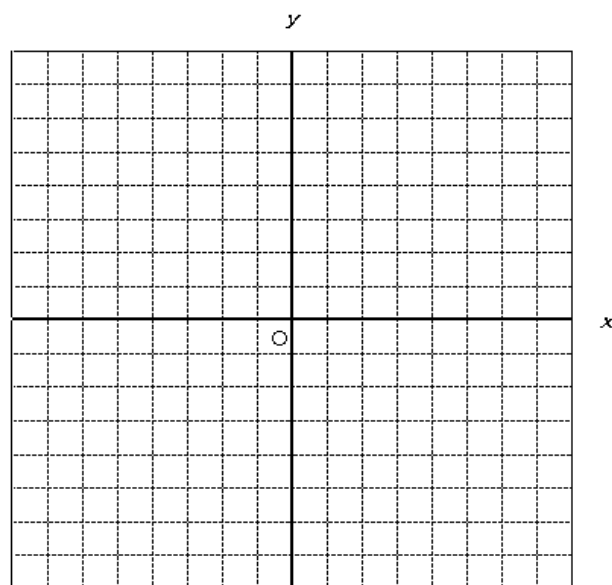
イ

- (1) $y = -2x$
- (2) $y = -4x$
- (3) $y = -x$



ウ

- (1) $y = \frac{1}{2}x$
- (2) $y = \frac{2}{3}x$
- (3) $y = \frac{3}{2}x$



エ

- (1) $y = -\frac{1}{3}x$
- (2) $y = -\frac{1}{4}x$
- (3) $y = -\frac{3}{2}x$

